

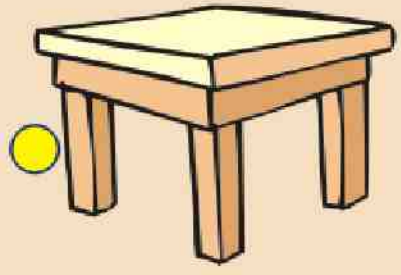
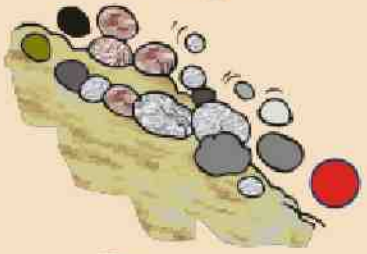
Learn by Association

Choose the picture on the right that comes closest to answering each question on the left. Draw a line from the question to the drawing that you think is the right answer.


A volcano is erupting! Which is the most vulnerable population, the one most likely to be affected?



What is one of the human actions that can cause landslides?



Alice has noticed that the level of the river is rising rapidly. What should the authorities do?



What would be a good prevention project that these kids could carry out to get to know more about the hazards in their community?



Uh oh, a tremor! Where is the least risky place for Thomas to go until it stops shaking?

